


GAMECARD CHAPTERS

Chapter Title	Page
World Geography.....	2
Land and Water Features.....	3
Geographical Regions.....	4
Bodies of Water.....	5
American Indians.....	6
Early Exploration	7
European Explorers.....	8
Cultural Interaction.....	9
West African Empires.....	10
Early English Colonies.....	11
New England Colonies.....	12
Middle-Atlantic Colonies.....	13
Southern Colonies.....	14
Colonial People.....	15
French and Indian War.....	16
Britain Gains Control.....	17
Britain Raises Revenue.....	18
Revolutionary Figures.....	19
Events Before the War.....	20
Revolutionary War Begins.....	21
Declaration of Independence.....	22
Revolutionary War Ends.....	23
Articles of Confederation.....	24



Chapter Title	Page
U.S. Constitution.....	25
Constitutional Principles.....	26
★Political Parties	27
First Five Presidents.....	28
Westward Expansion.....	29
Westward Migration.....	30
Inventions & Technologies.....	31
Abolitionist Movement.....	32
Suffrage Movement.....	33
Issues Dividing the Nation.....	34
Pre-Civil War Compromises.....	35
Union & Confederate States.....	36
Civil War Leaders.....	37
Civil War Begins.....	38
Civil War Ends.....	39
African American Soldiers.....	40
Effects of the Civil War.....	41
★Reconstruction.....	42
★Amendments.....	43
Answer Key.....	44



★Part of former US to 1877 standards. Not part of current US to 1865 standards.

WORLD GEOGRAPHY

1. What continent am I?



2. What continent am I?



3. What continent am I?



4. What continent am I?




5. What continent am I?



6. What continent am I?



7. What continent am I?



8. What two continents make up Eurasia?



9. Which lines on the globe measure how far north or south a location is from the Equator?



10. What is the name of the ocean whose waters are south of 60°S latitude?



11. What lines on the globe measure how far east or west a location is from the Prime Meridian?



12. Name all seven continents in alphabetical order.



LAND AND WATER FEATURES

13. This is an area of water surrounded by land, usually on three sides. It is smaller than a gulf.



14. This is a stream of water flowing into a larger body of water.



15. This is a flat area of land with a high elevation compared to the land surrounding it.



16. This is an area of water surrounded by land on all sides.



17. This is a wide area of flat land that might have a few hills, plateaus, or mountains.



18. This is an area of land surrounded by water on three sides. It sticks out into a body of water.



19. This is an area of land surrounded by water on all sides.



20. This is a land mass with a high elevation. It is usually rocky and jagged or covered in trees.



21. This is a stream of water that flows from a high to low elevation.



22. This land mass has a higher elevation compared to the land surrounding it. It is smaller than a mountain.



23. This is an area of water connected to an ocean or sea but partially surrounded by land. It is larger than a bay.



24. The state of Florida forms this type of land feature.

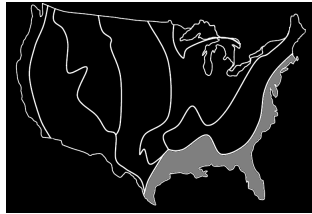


GEOGRAPHICAL REGIONS

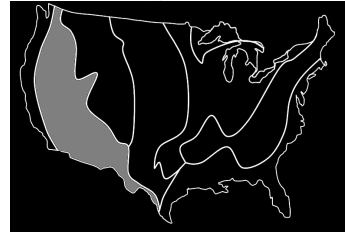
25. What is the name of this geographical region?



26. What is the name of this geographical region?



27. What is the name of this geographical region?



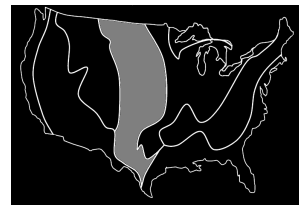
28. What is the name of this geographical region?



29. What is the name of this geographical region?



30. What is the name of this geographical region?



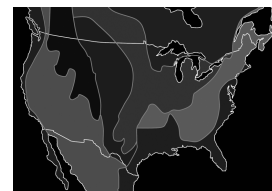
31. What is the name of this geographical region?



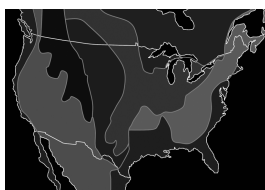
32. What is the name of this geographical region?



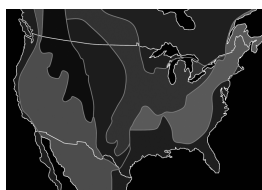
33. Death Valley can be found in what geographical region?



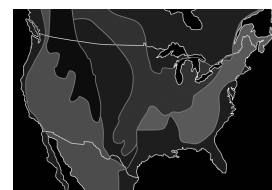
34. This is the location on the map that determines the directional flow of rivers in North America.



35. The Sierra Nevada and Cascade Mountain Ranges are part of which geographical region?



36. What region contains the oldest mountains in North America?



BODIES OF WATER

37. Name this body of water.



38. Name this body of water.



39. Name this body of water.



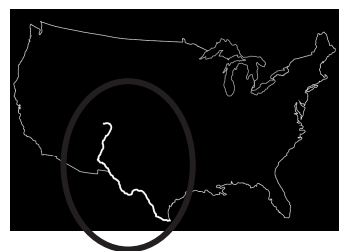
40. Name this body of water.



41. Name this body of water.



42. Name this body of water.



43. These two rivers are transportation arteries that carry farm and industrial products. What rivers are they?




44. What body of water carried European settlers, explorers, and immigrants to North America?



45. What is the western most body of water explored by Lewis and Clark?



46. I am known as the 'Gateway to the West'. What body of water am I?



47. This river forms the northeast border between the United States and Canada. What river is it?

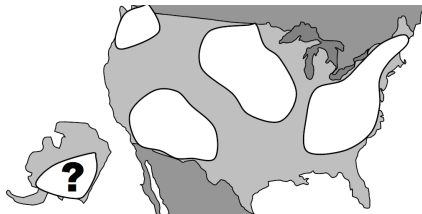


48. What body of water forms the southern border between the United States and Mexico?



AMERICAN INDIANS

49. What Indians inhabited the region on the map below?



50. What Indians inhabited the region on the map below?



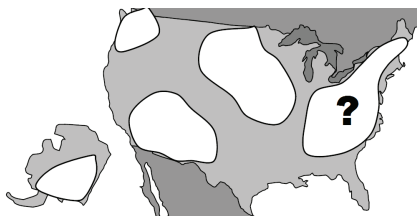
51. What Indians inhabited the region on the map below?



52. What Indians inhabited the region on the map below?




53. What Indians inhabited the region on the map below?



54. What Indians lived in a rainy and mild climate?



55. What Indians lived in the southern part of the Basin and Range region?



56. What Indians inhabited the Arctic region of North America?



57. Bows, arrows, and spears are examples of what types of resources?



58. What is the name given to a person who studies artifacts from the past?



59. What is the name of the archeological site in Virginia containing Indian ruins from nearly 15,000 years ago?



60. This Indian group was nomadic and traveled the Plains in search of the buffalo.



EARLY EXPLORATION

61. What are three obstacles explorers faced?



62. What are three accomplishments explorers achieved?



63. What are three things that motivated people to explore?



64. What are navigational tools?



65. What is the name of the body of water that explorers thought went across North America, connecting the Atlantic and Pacific Oceans?



66. What continent did most explorers come from?



67. What does 'prestige' mean?



68. What does 'inadequate supplies' mean?



69. What is a 'Missionary'?



70. What does 'superiority' mean?



71. European explorers sailed west across which ocean in order to reach North America?




72. What does 'economic opportunity' mean?




EUROPEAN EXPLORERS


73. Name the two explorers who sailed for France.




74. Who explored the Eastern Coast of Canada for England?




75. Who explored the present-day Southwest United States for Spain?




76. Who explored the Mississippi Valley Region for France?




77. Name the French explorer who established the settlement of Quebec.



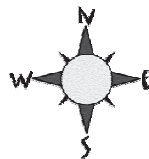
78. For what country did Francisco Coronado explore?



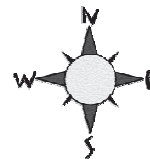
79. For what country did Samuel De Champlain explore?




80. For what country did John Cabot explore?




81. For what country did Robert La Salle explore?



82. European Explorers crossed which ocean in order to reach the New World?



83. What is the name of the present-day city in Canada that was established by Samuel De Champlain?



84. Name all four European Explorers and the country that each explored for.

